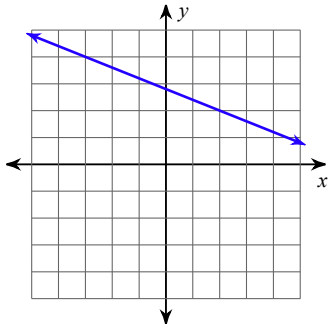


Finding the Slope of a Line from its Graph

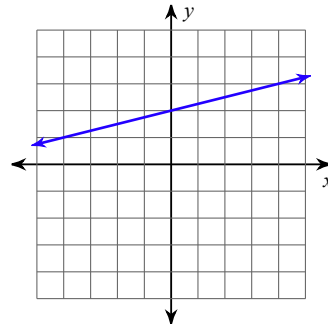
Find the slope of each line.

1)



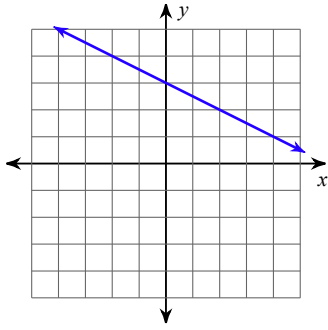
- A) $-\frac{2}{5}$ B) $\frac{5}{2}$
C) $-\frac{5}{2}$ D) $\frac{2}{5}$

2)



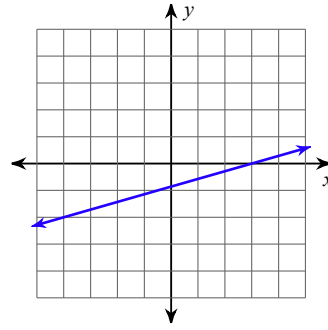
- A) 4 B) -4
C) $-\frac{1}{4}$ D) $\frac{1}{4}$

3)



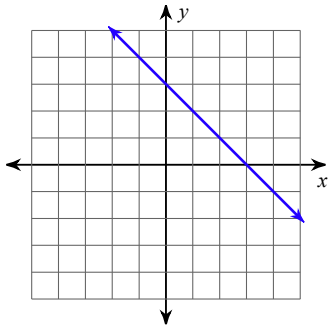
- A) 2 B) -2
C) $-\frac{1}{2}$ D) $\frac{1}{2}$

4)



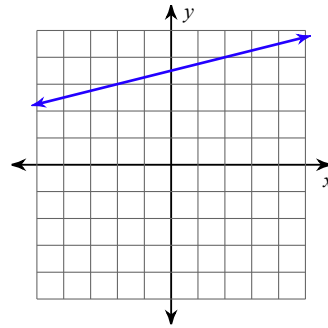
- A) $-\frac{2}{7}$ B) $-\frac{7}{2}$
C) $\frac{7}{2}$ D) $\frac{2}{7}$

5)



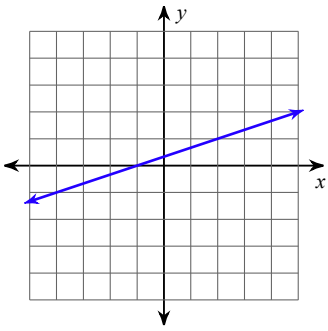
- A) $-\frac{4}{5}$ B) 1
C) -1 D) $\frac{4}{5}$

6)



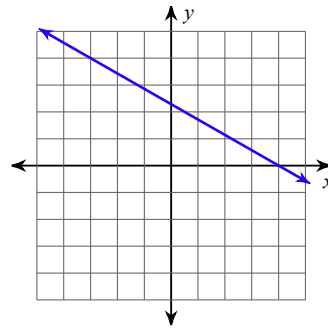
- A) $-\frac{1}{4}$ B) 4
C) $\frac{1}{4}$ D) -4

7)



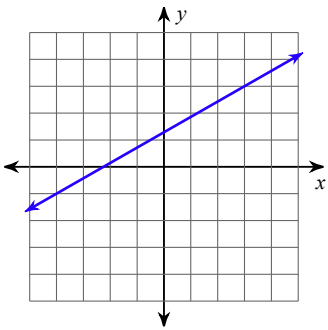
- A) 3 B) -3
C) $\frac{1}{3}$ D) $-\frac{1}{3}$

8)



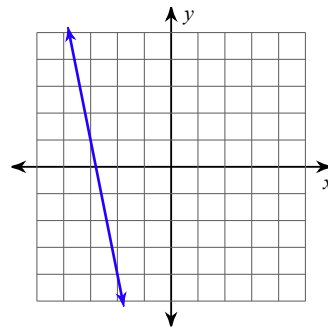
- A) $-\frac{4}{7}$ B) $\frac{4}{7}$
C) $\frac{7}{4}$ D) $-\frac{7}{4}$

9)



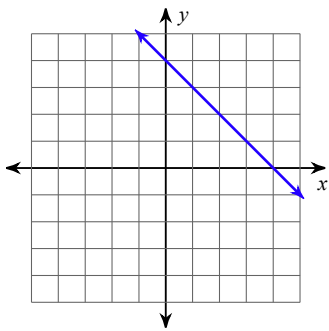
- A) $-\frac{4}{7}$ B) $\frac{7}{4}$
C) $-\frac{7}{4}$ D) $\frac{4}{7}$

10)



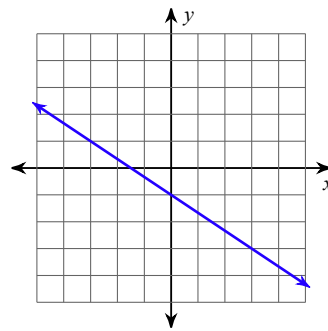
- A) 5 B) $-\frac{1}{5}$
C) -5 D) $\frac{1}{5}$

11)



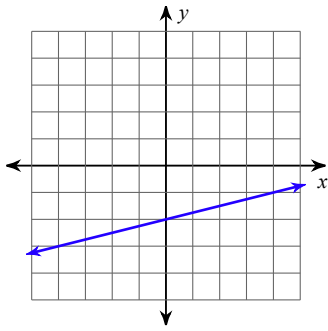
- A) 1 B) $\frac{1}{4}$
C) $-\frac{1}{4}$ D) -1

12)



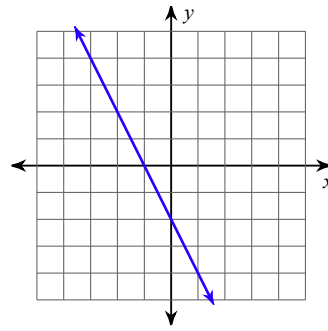
- A) $\frac{2}{3}$ B) $-\frac{2}{3}$
C) $-\frac{3}{2}$ D) $\frac{3}{2}$

13)



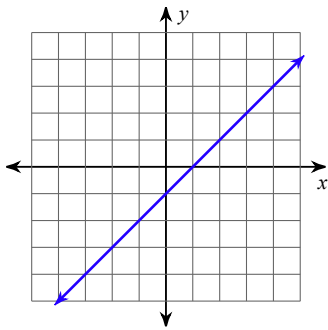
- A) 4 B) $\frac{1}{4}$
 C) $-\frac{1}{4}$ D) -4

14)



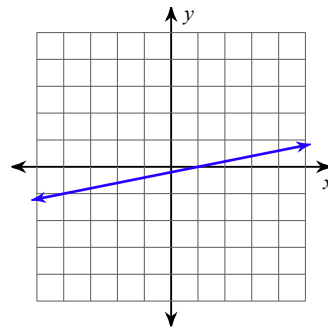
- A) $-\frac{1}{2}$ B) -2
 C) 2 D) $\frac{1}{2}$

15)



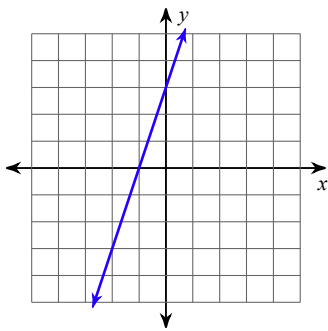
- A) 2 B) -2
 C) 1 D) -1

16)



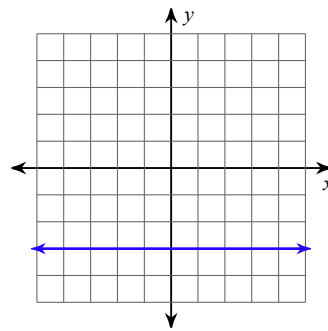
- A) -5 B) $-\frac{1}{5}$
 C) 5 D) $\frac{1}{5}$

17)



- A) 3 B) $-\frac{1}{3}$
 C) -3 D) $\frac{1}{3}$

18)



- A) $-\frac{3}{2}$ B) Undefined
 C) 0 D) $\frac{3}{2}$

Answers to

1) A
5) C
9) D
13) B
17) A

2) D
6) C
10) C
14) B
18) C

3) C
7) C
11) D
15) C

4) D
8) A
12) B
16) D