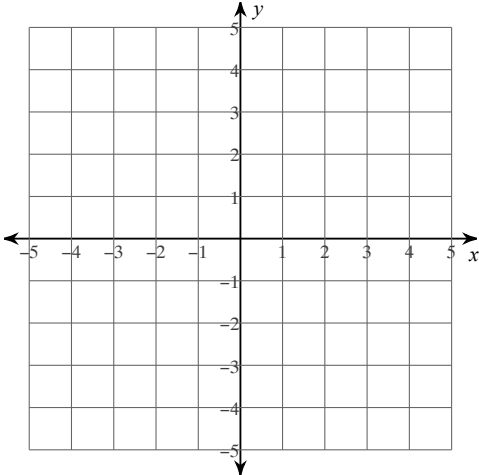


Coordinate System

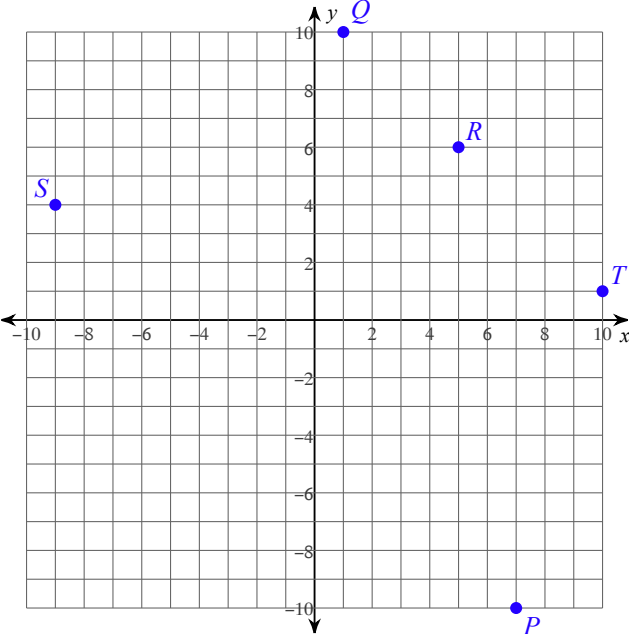
Plot each point.

- 1) $E(5, 4)$ $F(2, -1)$ $G(-3, -3)$
 $H(-4, 2)$ $I(0, -5)$



State the coordinates of each point.

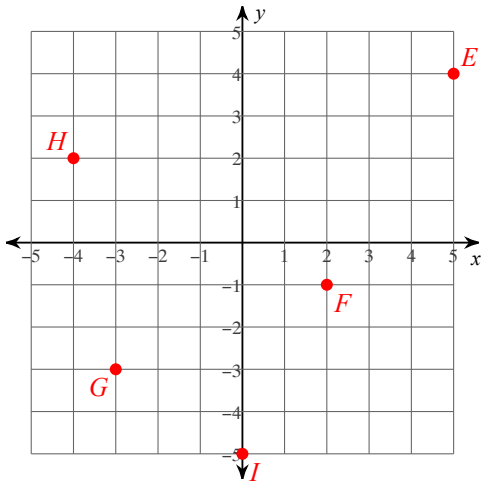
2)



Coordinate System

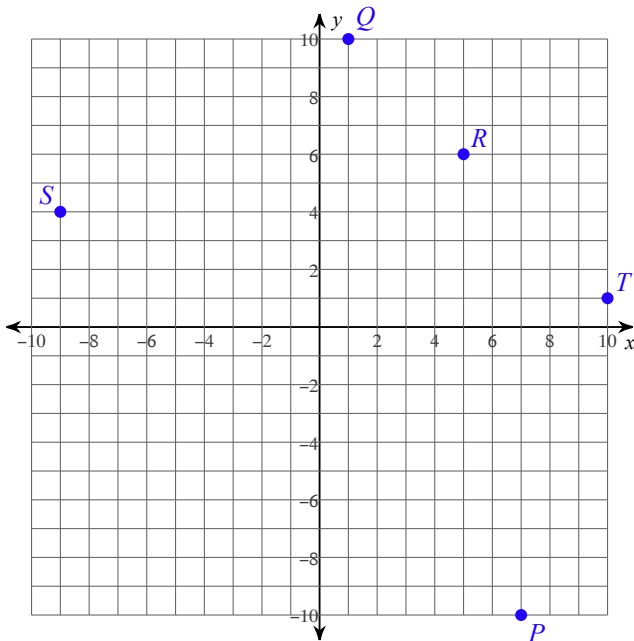
Plot each point.

- 1) $E(5, 4)$ $F(2, -1)$ $G(-3, -3)$
 $H(-4, 2)$ $I(0, -5)$



State the coordinates of each point.

2)



- $P(7, -10)$ $Q(1, 10)$ $R(5, 6)$
 $S(-9, 4)$ $T(10, 1)$